

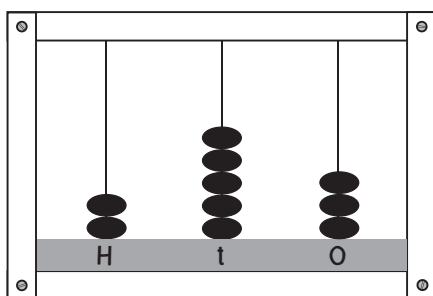


NA8 Place value to 1000 with an abacus

- 1 Each abacus shows how much money Ruby and her friends have saved in their bank accounts. Write how much they each have saved.



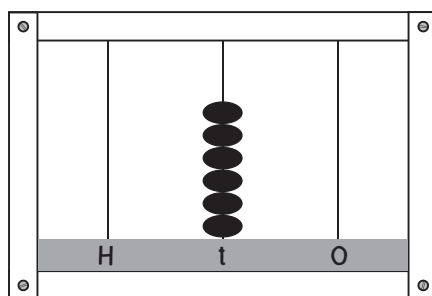
Ruby



\$



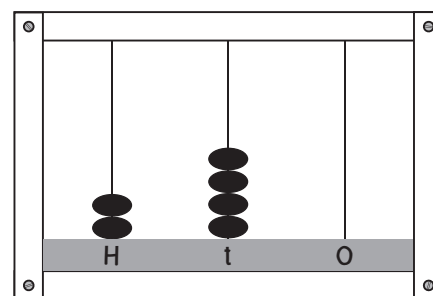
Oscar



\$



Zoe



\$

- 2 Who has saved the most?

- 3 Oscar received \$100 birthday money and deposited all of it into his account. Use a **red pencil** to add \$100 to the abacus above.

How much does Oscar have now?

- 4 Ruby did some chores and earned \$5. She deposited the money into her account. Use a **blue pencil** to add \$5 to the abacus above.

How much does Ruby have now?

- 5 Zoe won \$20 in a colouring competition. She deposited the money into her account. Use a **green pencil** to add \$20 to the abacus above.

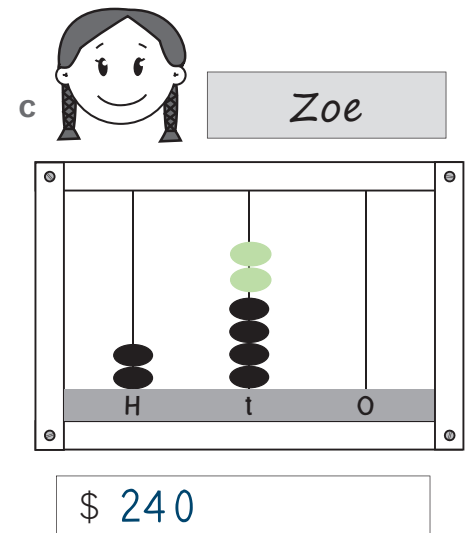
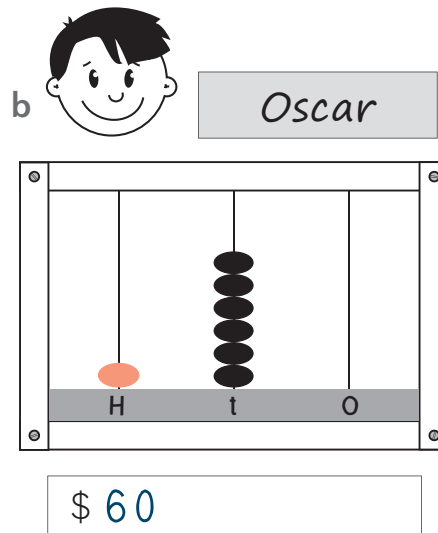
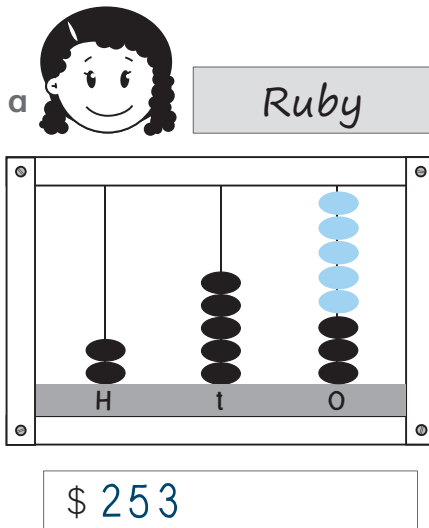
How much does Zoe have now?

- 6 Who has the most saved now?




NA8 Place value with an abacus


- 1 Each abacus shows how much money Ruby and her friends have saved in their bank accounts. Write how much they each have saved.




- 2 Who has saved the most? **Ruby**

- 3  Oscar received \$100 birthday money and deposited all of it into his account. Use a **red pencil** to add \$100 to the abacus above.

How much does Oscar have now? **\$160**

- 4  Ruby did some chores and earned \$5. She deposited the money into her account. Use a **blue pencil** to add \$5 to the abacus above.

How much does Ruby have now? **\$258**

- 5  Zoe won \$20 in a colouring competition. She deposited the money into her account. Use a **green pencil** to add \$20 to the abacus above.

How much does Zoe have now? **\$260**

- 6 Who has the most saved now? **Zoe**